

Dear Children.

- You Matter us most and we All Miss You!!!
- Stay Safe
- Be Kind to your Family
- Get Creative

"This too shall pass. And we will pick up right where we left Off!"

Summer Vacations are at our doorsteps. Holidays are a well-deserved opportunity to relax and rewind by indulging in activities that are pleasurable at the same time educative. We would like to thank all of you for making online classes and virtual Assessment a success. You are going to enjoy your holidays. It's a sincere request to all to complete holiday projects and home assignments on time. Engage yourself whole heartedly as you will learn a lot through it. Practice your hobbies or Inculcate new hobbies. Do a lot of Reading-can be newspapers, magazines, books or novels. Watch English news daily in order to equip yourself with the information and facts to be used as content in the writing skills.

Summer Holidays Homework is an Initiative on our part, to inculcate Innovativeness, creativity and interest in the tasks assigned to our students. It will not only enable them to recapitulate what was taught but will also help them to connect themselves to the various learning processes. Parents, please ensure that your child complete the assignment neatly.

In this pandemic time you need to prevent yourself from COVID-19 infections by following these simple measures:

1. Practice hand hygiene frequently.
2. Maintain respiratory hygiene and wellness.
3. Maintain at least a 1 meter distance between yourself and others.
4. Wear a three layer mask every time; you are going out without fell.
5. Boost your immunity through nutritious food, yoga and exercises.
6. Read and Revise the Course covered in the virtual classes.
7. Understand the concepts and practice questions.

8. Complete your pending assignments.(if any).

9. Take good care of your health and hygiene.

10. Avoid heavy and oily food and increase intake of fresh fruits and water to keep you well hydrated and energetic.

General Instructions

- All the work should be hand-written.
- Original drawings / illustrations and creative use of material will be appreciated.
- Present your work in any single copy with your name and class clearly written at the top.
- The work will be evaluated for all the subjects on the following parameters.

1. Idea and content

2. Presentation

3. Ability to answer the questions

4. Innovativeness

5. Creativity

Hindi

1- कविता की पंक्तियाँ पूरी कीजिए-

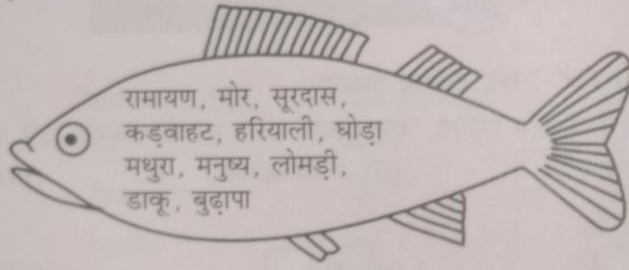
* लेकर सुगंध _____
_____ वन-वन,
सुंदर लगता _____,
_____ दिग- दिगंत
_____, आया बसंत।

2- महादेवी वर्मा का जीवन परिचय लिखिए।

3- हमारे भारतीय संविधान में बाइस(22)भाषाओं को मान्यता दी गई है। इन भाषाओं के नाम लिखिए।

4- गिल्लू के जीवन का अंत किस प्रकार हुआ ?

5- नीचे मछली के पेट में कुछ संज्ञा शब्द हैं। आप इनमें से व्यक्तिवाचक, जातिवाचक तथा भाववाचक संज्ञाएँ छाँटकर उचित शीर्षक के नीचे लिखिए-



रामायण, मोर, सूरदास,
कडवाहट, हरियाली, घोड़ा
मथुरा, मनुष्य, लोमड़ी,
डाकू, बुढ़ापा

व्यक्तिवाचक संज्ञा	जातिवाचक संज्ञा	भाववाचक संज्ञा
.....
.....
.....

6- बसंत ऋतु में सब किस प्रकार सुखी हो जाते हैं?

7- निम्नलिखित शब्दों में रूढ़, यौगिक और योगरूढ़ शब्दों को अलग-अलग करके लिखें-

पंकज, पुस्तक, लंबोदर, हाथी, घुड़सवार, नीलकंठ, जलधारा, घर, कलमदान

रूढ़ शब्द	यौगिक शब्द	योगरूढ़ शब्द
.....
.....
.....

8- लिपि किसे कहते हैं?

9- "रक्तदान महादान" इस पर एक चित्र बनाकर नारा लिखिए।

नीचे दिए गए चित्र को देखकर दिए गए स्थान में पाँच-छह वाक्य लिखिए-



English

(Literature)

- I. Write a biography of Geeta Phogat- the first Indian woman wrestler to win a gold medal in wrestling at the international level.

OR

Write a short paragraph on 'My favourite activity'

(Write details of your favourite activity e.g. reading books, singing, dancing, playing- why you like it- whether it has helped you in any way- if so how- conclusion)

- II. What is it that you like playing the most let your friends know about it. (Write at least 10 lines)

(Grammar)

- III. Use the phrases given below to make sentences of your own.

1. at the library
2. a quick nap
3. into the garden
4. the running stream

- IV. Look at the sentences given below and state their kinds.

1. How dare you talk to me like that!
2. Please shut the door on your way out.
3. How strange is that ! no one knows about it yet?
4. Wow ! that looks absolutely wonderful !
5. Did you know, Rahul met with an accident last night?

- V. Re-order these interrogative sentences.

1. today/van/was/the/late
2. your/state/is/who/governor/the/of
3. book/we/first/read/are/to/going
4. I/book/geography/may/borrow/you

- VI. Write 5 imperative sentences of your own.

- VII. Underline in the phrase in the following sentences.

1. She left the house at noon.
2. The army fought with great courage.
3. A bouquet of roses was prepared for the chief guest .
4. Mother has kept the dinner in the kitchen.

5. The train is out of sight.

VIII. Use the following 'WH' words to form sentences.

(Whose, Why , When, What, Where)

IX. There are 6 letters which have two sounds.

(C, G , S , U, W , and Y)

Example: C sounding as 'K' (Cat) (Across) C sounding as 'S' (Ceremony) (Sentence)

Prepare a list of words [3-3each] with two sounds G sounding as 'G' and G sounding as 'J'

Example: G sounding as 'G' (Girl) (Gargle) G sounding as 'J' (General) (Ginger)

X. Form as many words as you can from the words given below.

(Example: train – rain , air, ant , it , at , in and tin)

1. Leaders_____
2. Reading_____
3. Snow_____
4. Magnetic_____
5. Suitable_____

Maths

Multiple Choice Questions

Que1. 1 billion is equal to

- (A) 100 millions
- (B) 10 millions
- (C) 1000 lakhs
- (D) 10000 lakhs

Question 2. Which of the following numbers in Roman Numerals is incorrect?

- (A) LXII
- (B) XCI
- (C) LC
- (D) XLIV

Question 3. Population of Agra and Aligarh districts in the year 2001 was 36,20, 436 and 29,92,286, respectively. What was the total population of the two districts in that year?

Question 4. In one state, the number of bicycles sold in the year 2002-2003 was 7,43,000. In the year 2003-2004, the number of bicycles sold was 8,00,100. In which year were more bicycles sold? and how many more?

Question 5. Insert comas in appropriate place and write following numbers according to Indian and international system.

(a)1900218

(b)50500401

Question 6. Make the greatest and the smallest 4-digit numbers using any four different digits, with conditions as given. (Note: - the digits should not repeat.)

(a) Digit 5 is always at one's place

(b) Digit 1 is always at tens place

Question 7. Answer the following questions

(a) What comes just after 2779999?

(b) What comes just before 1110000?

Question 8. Write the numeral and expanded form for the following number name:

(a) Five million two hundred thousand and fifty

(b) Two crore two lakh two thousand two hundred and two

Question 9. The town newspaper is published every day. One copy has 12 pages. Everyday 11,980 copies are printed. How many total pages are printed everyday?

Question 10

A bus started its journey from Delhi – Kanpur – Kolkata – Hyderabad – Mumbai – Delhi with a speed of 60 km/hr. Read the city-distance table and answer the questions:

CITIES	DISTANCE
DELHI - KANPUR	420 KM
KANPUR - KOLKATA	1000 KM
KOLKATA - HYDERABAD	1800 KM
HYDERABAD - MUMBAI	711 KM
MUMBAI - DELHI	1407 KM

1. Find the total distance covered by the bus from Delhi to Kolkata.

2. Find the total distance covered by the bus from Kolkata to Mumbai.

3. Find the total distance covered by the bus if it starts from Delhi and returns back to Delhi.

4. Find the differences of distances from Kanpur to Hyderabad and Hyderabad to Delhi.

5. Find the time taken by the bus to commute from:

a) Delhi to Kanpur _____

b) Kolkata to Hyderabad _____

(Speed of the bus = 60 km/hr)

SST

Q-1 Choose the correct option.

- 1- Written sources were mainly found on
 - a- palm leaves
 - b- wood
 - c- oak
 - d- none of the above ()

- 2- The civilization flourished around the
 - a- land
 - b- rivers
 - c- hills
 - d- none of the above ()

- 3- The early people who gathered their food are called
 - a- farmers
 - b- merchants
 - c- skilled gatherers
 - d- hunters ()

- 4- Pit houses were made in
 - a- Mehrgarh
 - b- Hallur
 - c- Mahagara
 - d- Burzahom ()

- 5- _____ was found in the burial of Mehrgarh.
 - a- dogs
 - b- buffaloes
 - c- goats
 - d- cows ()

Q-2 Fill in the blanks:

- 1- Bolan pass is an important route into.....
- 2- Remains of square or rectangular houses have been found in
- 3- Hunter-gatherers moved from one place to another on.....
- 4- The bark of the birch tree was used to prepare.....
- 5- Inscriptions were written on hard surface like.....

Q-3 State true or false:

- 1- The Iranians are Greeks called India, Bharat. ()
- 2- The Garo hills are located in South India. ()
- 3- History tells us about the past. ()
- 4- Mehrgarh is one of the third earliest village we know about. ()
- 5- Cave paintings are found in North uttar pradesh. ()

Q-4 Match the following:

- | | |
|----------------|--------------|
| 1- Manuscripts | goats |
| 2- Ved | handwritten |
| 3- Prehistory | nomadic life |
| 4- Burial | atharva |
| 5- Early man | not written |

Q-5 Answer in one sentence.

- 1- What are Manuscripts?
- 2- What is history?
- 3- Define archaeology.
- 4- Where did the early people store grain?
- 5- Define hunter- gatherer.

Q-6 Write a short note on the life at Mehrgarh.

Q-7 Write any three features of archaeological sources.

Activity fun:

Draw a beautiful diagram of "Solar System " and color it.(as given in the chapter 1of geography).

Sanskrit

1-

चित्राणि दृष्ट्वा संस्कृतपदानि लिखत-

		
.....
		
.....

2-वर्णसंयोजनेन पदं लिखत-

* च+अ+ष+अ+क+अः = -----

* घ+अ+ट्+इ+क+आ = -----

मञ्जूषातः पदं चित्वा रिक्तस्थानानि पूरयत-

नृत्यन्ति

गर्जतः

धावति

चलतः

फलन्ति

खादति

(क) मयूराः

(घ) सिंहौ

(ख) गजौ

(ङ) वानरः

(ग) वृक्षाः

(च) अश्वः

3-

4- प्रश्नानाम् उत्तराणि लिखत-

* घटिका किम् सूचयति ?

* सौचिकः किं करोति ?


5- शब्दार्थः लिखत-

* उपवने


* चषकः

* कदलीफलानि


चित्राणि दृष्ट्वा संख्यां लिखत-




..... कन्दुकानि।



..... चटकाः।



..... पुस्तकम्।



..... मयूरौ।

6-

7- पदानां वर्णविच्छेदं प्रदर्शयत -

* चटके = -----

* मयूराः = -----

8- चित्राणि दृष्ट्वा पदानि हिन्दीः पदं लिखत- (दिए गए चित्रों के नाम हिंदी में लिखें।)



9- संस्कृत के प्रमुख कवि व लेखकों के नाम लिखिए।(किन्ही पाँच के)

10- संख्यावाचक शब्द लिखत-(दिए गए अंको को संस्कृत भाषा में लिखिए।)

*2 ----- 7-----

*4----- 10-----

GK

Answer the following questions

- Q1. Which building was built as a memorial to the first Empress of India in Kolkata and was open to the public in 1921?
- Q2. Name the dance form begins with alarippu, meaning 'flowering bud'.
- Q3. Write any two features of our constitution.
- Q4. Which team sports is played outdoors on horseback where the objective is to score goals against an opposing team?
- Q5. Identify the sports person and the sports they played.



- Q6. Draw the map of India and locate any three states and its three cities .
- Q7. Write five lines about Hawa Mahal.
- Q8. Name any five popular dance form in the world.
- Q9. Which games are included in Olympic? Name any five.
- Q10. What is the name of new Covid variant from India?

Computer

Answer the following questions

- Q1. What is the difference between input and output devices?
- Q2. What do you mean by ports in computer system? Write the names of any three types of ports.
- Q3. Which types of files the Disk Cleanup tool can delete from the computer?
- Q4. Write the steps to insert a video file from the Internet.
- Q5. What is the use of action buttons?
- Q6. How many types of keys are present on the keyboard of a computer? Name them.
- Q7. Divya is the owner of a printing press. She wants to buy a printer for her new project to print good quality drawings and building construction plans. Suggest her which type of printer should she buy.
- Q8. Naman is a left-handed person. He always faces problems in using a computer as a mouse is set for the right hand person. Suggest a method by which the mouse can be configured according to Naman.
- Q9. Your brother wants to create a PowerPoint Presentation with the recorded audio. Can you help your brother by writing the steps to do so?
- Q10. Make a PowerPoint presentation on the topic “ Parts of Computer”. Save the file with your name ,class, section (Aman 6 B) and mail it on my email address panchaldharmendra1857@gmail.com
