

Dear Children.

- You Matter us most and we All Miss You!!!
- Stay Safe
- Be Kind to your Family
- Get Creative

"This too shall pass. And we will pick up right where we left Off!"

Summer Vacations are at our doorsteps. Holidays are a well-deserved opportunity to relax and rewind by indulging in activities that are pleasurable at the same time educative. We would like to thank all of you for making online classes and virtual Assessment a success. You are going to enjoy your holidays. It's a sincere request to all to complete holiday projects and home assignments on time. Engage yourself whole heartedly as you will learn a lot through it. Practice your hobbies or Inculcate new hobbies. Do a lot of Reading-can be newspapers, magazines, books or novels. Watch English news daily in order to equip yourself with the information and facts to be used as content in the writing skills.

Summer Holidays Homework is an Initiative on our part, to inculcate Innovativeness, creativity and interest in the tasks assigned to our students. It will not only enable them to recapitulate what was taught but will also help them to connect themselves to the various learning processes. Parents, please ensure that your child complete the assignment neatly.

In this pandemic time you need to prevent yourself from COVID-19 infections by following these simple measures:

1. Practice hand hygiene frequently.
2. Maintain respiratory hygiene and wellness.
3. Maintain at least a 1 meter distance between yourself and others.
4. Wear a three layer mask every time; you are going out without fell.
5. Boost your immunity through nutritious food, yoga and exercises.
6. Read and Revise the Course covered in the virtual classes.
7. Understand the concepts and practice questions.

8. Complete your pending assignments.(if any).

9. Take good care of your health and hygiene.

10. Avoid heavy and oily food and increase intake of fresh fruits and water to keep you well hydrated and energetic.

General Instructions

- All the work should be hand-written.
- Original drawings / illustrations and creative use of material will be appreciated.
- Present your work in any single copy with your name and class clearly written at the top.
- The work will be evaluated for all the subjects on the following parameters.

1. Idea and content

2. Presentation

3. Ability to answer the questions

4. Innovativeness

5. Creativity

Hindi

प्रश्न 1. पाठ 2 एवं 3 से कॉपी में लिखवाये गए नवीन शब्दों में से कोई 5-5 शब्द लिखिए।

प्रश्न 2. पाठ 2 एवं 3 में से दिए गए शब्दों के अर्थ लिखिए-

- | | |
|-----------|---------------|
| 1. गर्व | 4. पुरस्कार |
| 2. मुक्ति | 5. प्रकट होना |
| 3. सावधान | 6. धैर्य |


प्रश्न 3. दिए गए प्रश्नों के उत्तर **एक** शब्द में लिखिए-

1. गाँधी जी का जन्म कहाँ हुआ था?
2. लकड़हारे की कुल्हाड़ी कहाँ गिर गई?
3. नदी में से कौन प्रकट हुए?

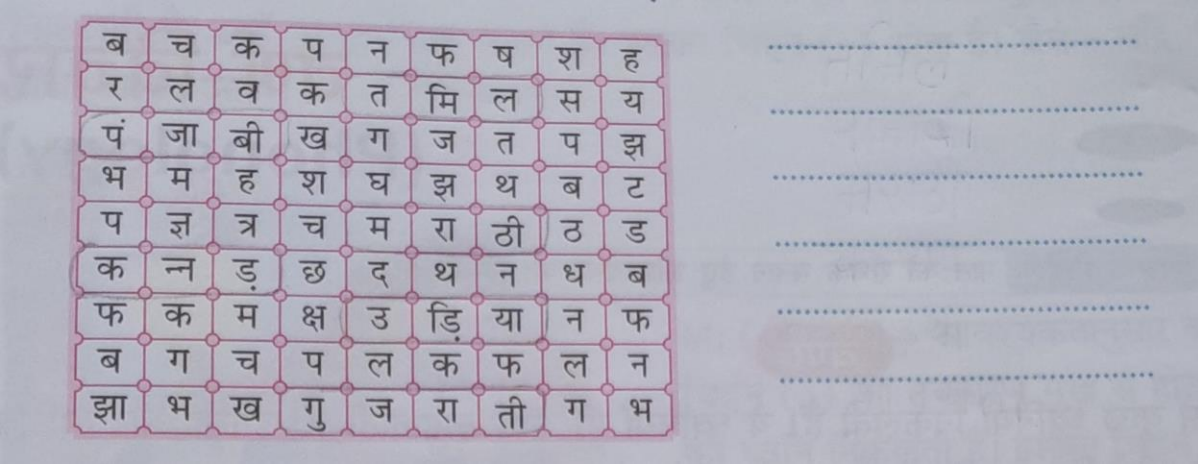
प्रश्न 4. सुलेख -पुस्तिका में आरंभ के **सात** पृष्ठ सुंदर लिखावट में लिखिए।

प्रश्न 5. अपनी पुस्तक से “चिड़िया का घर” कविता के कवि का नाम लिखिए और एक “घर” का चित्र बनाकर उसमें रंग भरें और कविता को सस्वर याद करें।

प्रश्न 6. वैश्विक महामारी कोरोना से बचाव के लिए सबसे उपयोगी आयुर्वेदिक औषधि “काढ़ा” बनाने की विधि अपने अभिभावकों की सहायता से 40-50 शब्दों में लिखिए।
प्रश्न 7. चित्र देखकर भाषा का रूप लिखिए-



प्रश्न 8. दिए गए वर्ग में से भाषाएँ चुनकर लिखिए-



प्रश्न 9. 31 से 50 तक हिंदी में गिनती लिखिए।

प्रश्न 10. “इंसान की एक-एक सांस पेड़ों की कर्जदार, अभी भी वक्त है, संभल जाइए, एक पेड़ जरूर लगाइए।” इस तरह का संदेश देते हुए सचित्र एक नारा लिखिए।

English

Q1. Make a collage of the characters of Chapter -3 of your English Text (I) book and paste it .(If you want you can make the collage of your family as this chapter is also rotating around the family members.)

Q2. Learn and write all the word meanings done in your English Text copy of Chapter 1 and 3 and decorate the page beautifully.

Q3. Unscramble the following words of your chapters:-

1. nebaeht

2. *subbio*
3. *detaryhded*
4. *gnhterts*
5. *htigs*
6. *oombba*
7. *rdyartuoc*
8. *nrobbuts*

Q4. Write the kinds of sentences.

1. *Have you completed your today's task?*
2. *An elephant is a huge animal.*
3. *Be polite to others.*
4. *What a surprise!*
5. *He is not fond of swimming.*

Q5. Write one example for each of the kind of sentence.

1. *Assertive statement*
.....
2. *Negative statement*
.....
3. *Interrogative sentence*
.....
4. *Imperative sentence*
.....
5. *Exclamatory sentence*
.....

Q6. Write 5 sentences on indoor games, circle the common noun and underline the proper noun in those sentences.

Q7. Classify the following gender -nouns into different types and put them in their proper columns:-

<i>Cup</i>	<i>Queen</i>	<i>Engineer</i>
<i>Doctor</i>	<i>Hero</i>	<i>Car</i>
<i>King</i>	<i>Door</i>	<i>Cousin</i>
<i>Bitch</i>	<i>Waitress</i>	<i>Poet</i>

<i>Masculine</i>	<i>Feminine</i>	<i>Neuter</i>	<i>Common</i>

Q8. Tick the word that tells how the person in each of the following situations probably feels and draw the emoji for each feeling.

- The super market has no bread left. Mother was.....
(a) Disappointed () (b) Happy () (c) Sad ()
- The teacher said, "It's time to go to the playground." The children were
(a) Angry () (b) Excited () (c) Tired ()
- The dog ran towards the small boy. The boy was.....
(a) Pleased () (b) Angry () (c) Frightened ()
- When the lady opened the door people shouted, "Happy Birthday." The lady was
(a) Relaxed () (b) Surprised () (c) Worried ()
- The man could not find his wallet. The man was
(a) Relaxed () (b) Worried () (c) Bored ()

Q9. Read the questions carefully and tick the appropriate option for each.

- Which word has the same sound as 'i' in the word 'night'?
(a) Chit () (b) Bite () (c) Film ()
- Choose the option with the incorrect spelling.
(a) Eight () (b) Chief () (c) Peice ()
- Which word can be added before 'fast' to make a new word?
(a) Break () (b) Speed () (c) Quick ()

Q10. Do 10 pages of Cursive writing in your English Writing books.

Maths

Q 1. Write the following in words:

- 32,564 = _____
- 1,06,945 = _____
- 2,31,114 = _____

Q 2. Compare the following using '<', '>' or '=':

a) $23247 \dots\dots\dots 23427$

c) $735643 \dots\dots\dots 654642$

b) $10897 \dots\dots\dots 10798$

d) $535973 \dots\dots\dots 574395$

Q 3. Write the following numbers in ascending and descending order:

a) 31243, 43243, 14324, 32432

b) 404234, 537934, 132122, 573454

Q 4. Write the greatest and the smallest 5-digit numbers using the following digits only once:

	Smallest Number	Greatest Number
a) 2,1,8,0,3
b) 8,3,5,1,9
c) 4,6,5,3,2

Q 5. Add / Subtract the following:

a) $34,213 + 32,442 = \dots\dots\dots$

b) $46,246 - 24,634 = \dots\dots\dots$

c) $4,62,933 - 4,62,462 = \dots\dots\dots$

d) $57,340 + 21,311 = \dots\dots\dots$

Q 6. Tick (\checkmark) the correct answer:

A. The successor of 3,04,589 is:

a) 3,04,580

c) 3,04,588

b) 3,04,590

d) 3,04,598

B. The greatest 6-digit number formed by using the digits 1,4,2,8,0 and 7 is:

a) 1,02,478

c) 1,24,780

b) 8,74,210

d) 8,74,201

C. Which of the following comparison is correct?

a) $35,980 > 35,890$

b) $4,23,456 < 4,23,356$

c) $1,60,004 < 1,06,004$

d) $67,789 > 67,989$

D. The Roman numeral for 128 is:

- a) CXXVIII
- b) CXVIII
- c) LXXVIII
- d) CXXIIX

E. The Hindu-Arabic numeral for LXXIX is:

- a) 69
- b) 79
- c) 80
- d) 81

Science

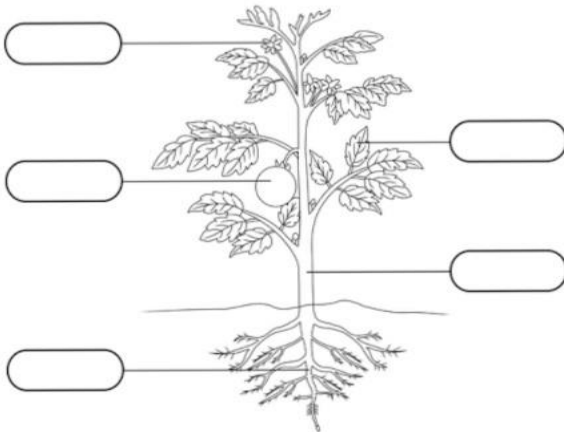
Q.1 The green coloured substance present in the leaves is called _____.

Q.2 Features that help the organisms in surviving in different kinds of habitats are called _____.

Q.3 Which is the only mammal that can fly?

Q.4 Label the parts of a plant.

Label the Parts of a Plant



Word Box

Flower Fruit
Stem Leaf Root

Q.5

Fun Time

Crossword

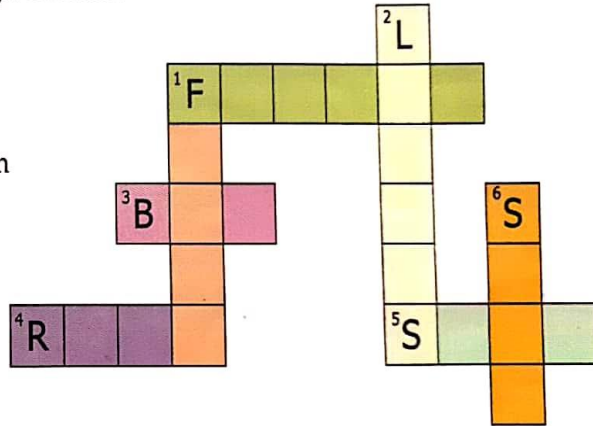
Solve the crossword with the help of the given clues:

Down

- 1 Flower changes into this.
2. Kitchen of plant.
6. It helps in transporting material from roots to leaves.

Across

1. Colourful part of a plant.
3. It grows into a flower.
4. Part of plant below the ground.
5. It grows into a new plant.



Q.6

Observe carefully the given pictures. Group the animals shown according to their feeding habits in the given table:



Herbivores	Carnivores	Omnivores

Q.7 ACTIVITY: Do and learn

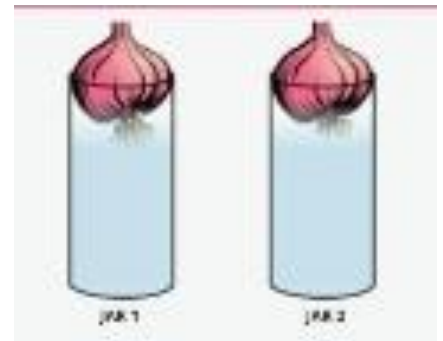
- ion of growth of roots and shoot in water as Hydroponic plant.
- glass jars and fill them with water.
- two onion bulbs and place one on each jar, as shown in figure.
-

Demonstrat

Take two

Now take

Measure



the length of roots and shoot after some days.

SST

Q.1 TRUE OR FALSE.

1. Early man became an artist and enjoyed drawing. ____
2. Early man was a biped. ____
3. The first home of early man was a hut. ____

Q.2 FILL IN THE BLANKS.

1. Early man ate _____, _____ and _____.
2. Rubbing two stones together can make _____.
3. Early man needed tools to dig out and hunt _____.
4. Early man made _____ using sticks and sharp stones.

Q.3 Answer the following questions.

1. What did the early man eat in the beginning?
2. Where did early man live and what kind of clothes did they wear?
3. How did early man make fire? Draw the picture of fire and colour it.

Q.4 Read the chapter 1 "The story of Early Man " and frame five questions from the chapter.

Q.5 Read the "chapter 10 Some Great Men" carefully and write five lines about any two great men.

Q.6 Draw a physical map of India and mark the neighbouring countries given below.

1. Afghanistan
2. Pakistan
3. China
4. Nepal
5. Bhutan
6. Srilanka

GK

Q.1 Read the statement and Identify the bird:-

1. This bird holds its beak upside down while feeding-
2. This flightless bird find its prey through its sense of smell-
- 3.This small bird drinks 8 times more water than its actual body weight-

Q.2 Identify the country with the help of their National Birds:-

- 1.Jungle Fowl-
- 2.Maldives-
- 3.Golden Eagle-

Q.3 Answer the following questions-

1. Which is called the queen of spices?
2. Saffron is obtained from which part of the plant?

Q.4 Fill in the blanks:-

- 1.Plants need_____ or they will wilt.
2. plants provide_____ and warmth for animals to live.

Computer

Q.1 Fill in the blanks:-

- 1._____ is an example of first-generation computers.
- 2.A combination of 8 bits makes up a_____.
- 3.The deleted files and folders are stored in the _____.

Q.2 True/False

- 1.A folder can have many folders inside it.
- 2.The primary memory has a limited storage capacity.
- 3.The second generation computers used vacuum tubes.

Q.3 Give the full form of the following:-

- 1.RAM
- 2.ROM
- 3.BIOS

Q.4 Give two examples of Primary and Secondary Memory.
